

Please write clearly in block capitals.

Centre number

--	--	--	--	--

Candidate number

--	--	--	--

Surname

Forename(s)

Candidate signature

I declare this is my own work.

GCSE COMBINED SCIENCE: TRILOGY

H

Higher Tier
Biology Paper 1H

Time allowed: 1 hour 15 minutes

Materials

For this paper you must have:

- a ruler
- a scientific calculator.

Instructions

- Use black ink or black ball-point pen.
- Pencil should only be used for drawing.
- Fill in the boxes at the top of this page.
- Answer **all** questions in the spaces provided.
- If you need extra space for your answer(s), use the lined pages at the end of this book. Write the question number against your answer(s).
- Do all rough work in this book. Cross through any work you do not want to be marked.
- In all calculations, show clearly how you work out your answer.

Information

- The maximum mark for this paper is 70.
- The marks for questions are shown in brackets.
- You are expected to use a calculator where appropriate.
- You are reminded of the need for good English and clear presentation in your answers.

For Examiner's Use	
Question	Mark
1	
2	
3	
4	
5	
6	
TOTAL	



There are no questions printed on this page

*Do not write
outside the
box*

**DO NOT WRITE ON THIS PAGE
ANSWER IN THE SPACES PROVIDED**



0 1

Bacteria can cause a variety of diseases in humans.

0 1 . 1What are **two** similarities between a bacterial cell and an animal cell?**[2 marks]**Tick (✓) **two** boxes.

Both have a cell membrane.

Both have a cell wall.

Both have a nucleus.

Both have cytoplasm.

Both have plasmids.

0 1 . 2

Salmonella food poisoning is caused by bacteria in food.

Give **one** symptom of salmonella food poisoning.Do **not** refer to vomiting or diarrhoea in your answer.**[1 mark]**

Question 1 continues on the next page**Turn over ►**

0 1 . 3

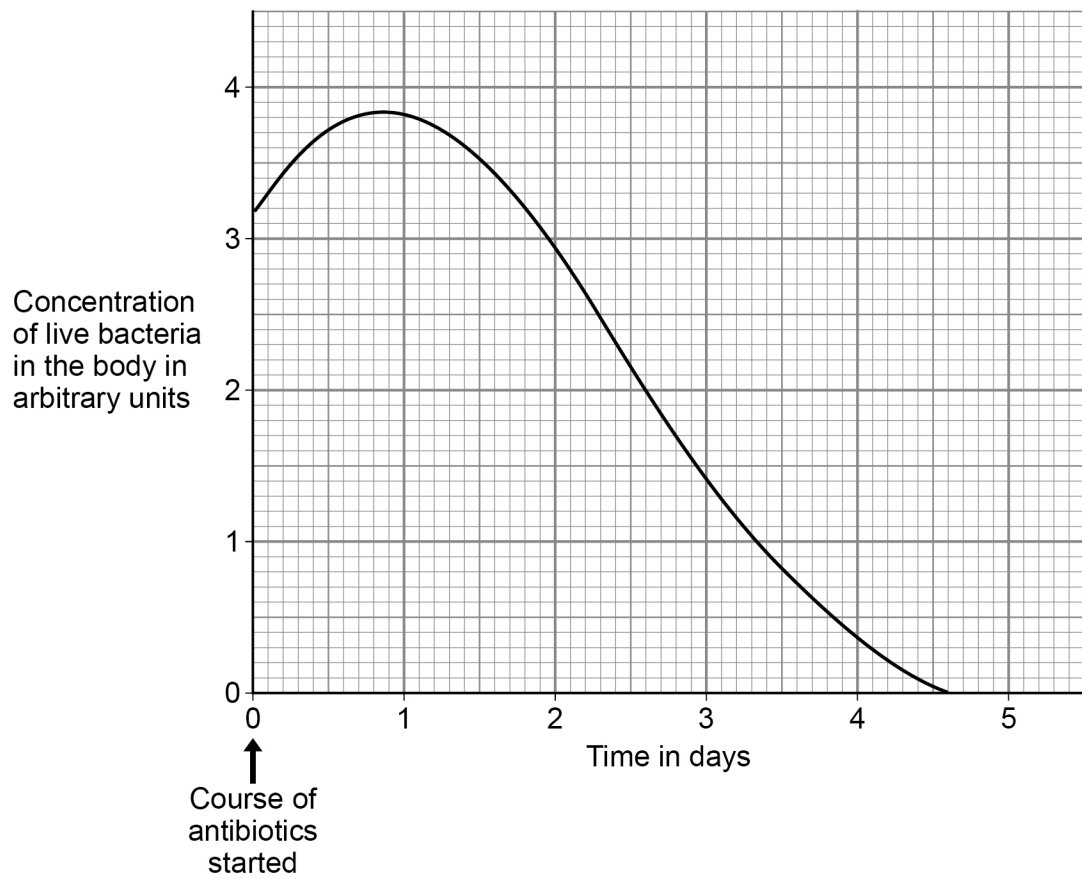
What is the name of the first antibiotic developed?

[1 mark]

A child with a severe bacterial infection was given a course of antibiotics.

Figure 1 shows how the concentration of live bacteria in the child's body changed when taking the course of antibiotics.

Figure 1



0 1 . 4

The concentration of live bacteria in the body continued to increase after starting the course of antibiotics.

Suggest **one** reason why.

[1 mark]

0 1 . 5

After 3 days of taking the antibiotic:

- the child felt better
- there were still bacteria in the child's body.

Why did the child feel better?

[1 mark]

Tick (✓) **one** box.

Bacteria had become immune to the antibiotic.

The child had become resistant to the bacteria.

There were fewer toxins in the body than at day 0

0 1 . 6

Suggest why doctors do **not** give antibiotics to patients with minor infections.

[1 mark]

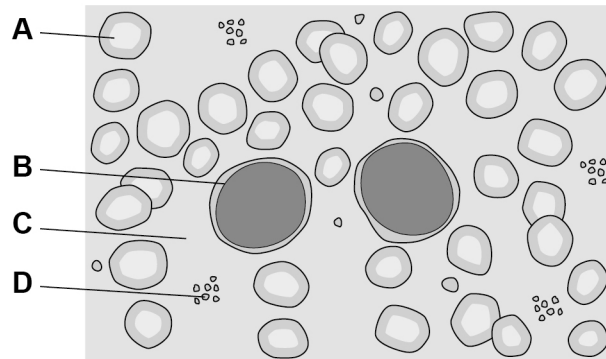
Question 1 continues on the next page

Turn over ►



Figure 2 shows blood viewed using a microscope.

Figure 2



0 1 . 7 A vaccine will stimulate the production of antibodies.

Which part of the blood in **Figure 2** produces antibodies?

[1 mark]

Tick (✓) **one** box.

A B C D

0 1 . 8 Which part of the blood in **Figure 2** starts the clotting process?

[1 mark]

Tick (✓) **one** box.

A B C D

9



0 2

This question is about cell division.

0 2 . 1

Write the biological structures from the box in the correct order of size.

[1 mark]

cell	chromosome	gene	nucleus
------	------------	------	---------

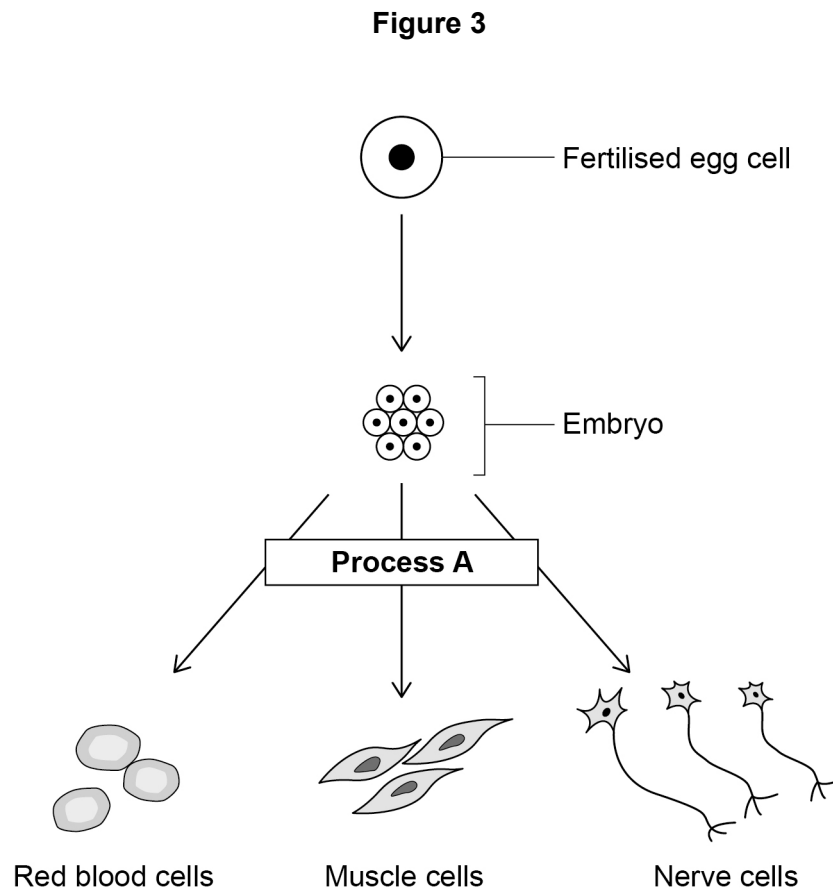
Smallest



Largest

Question 2 continues on the next page**Turn over ►**

Figure 3 shows how a fertilised egg cell can produce specialised cells.



0 2 . 2 Name **Process A**.

[1 mark]

0 2 . 3 How many cell divisions are needed to form a 16-cell embryo from the original fertilised egg cell?

[1 mark]

Number of cell divisions = _____



0 2 . 4

In humans a fertilised egg cell contains 23 pairs of chromosomes.

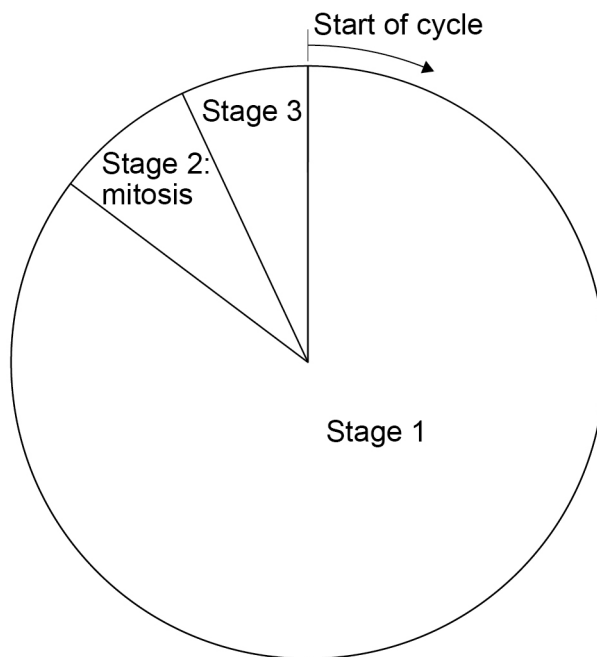
How many chromosomes will there be in each of the embryo cells?

[1 mark]

0 2 . 5

Figure 4 represents a cell cycle for a human embryonic cell.

Figure 4



Describe **one** change in the cell that occurs during **each** of the stages of the cell cycle.

[3 marks]

Stage 1 _____

Stage 2 _____

Stage 3 _____

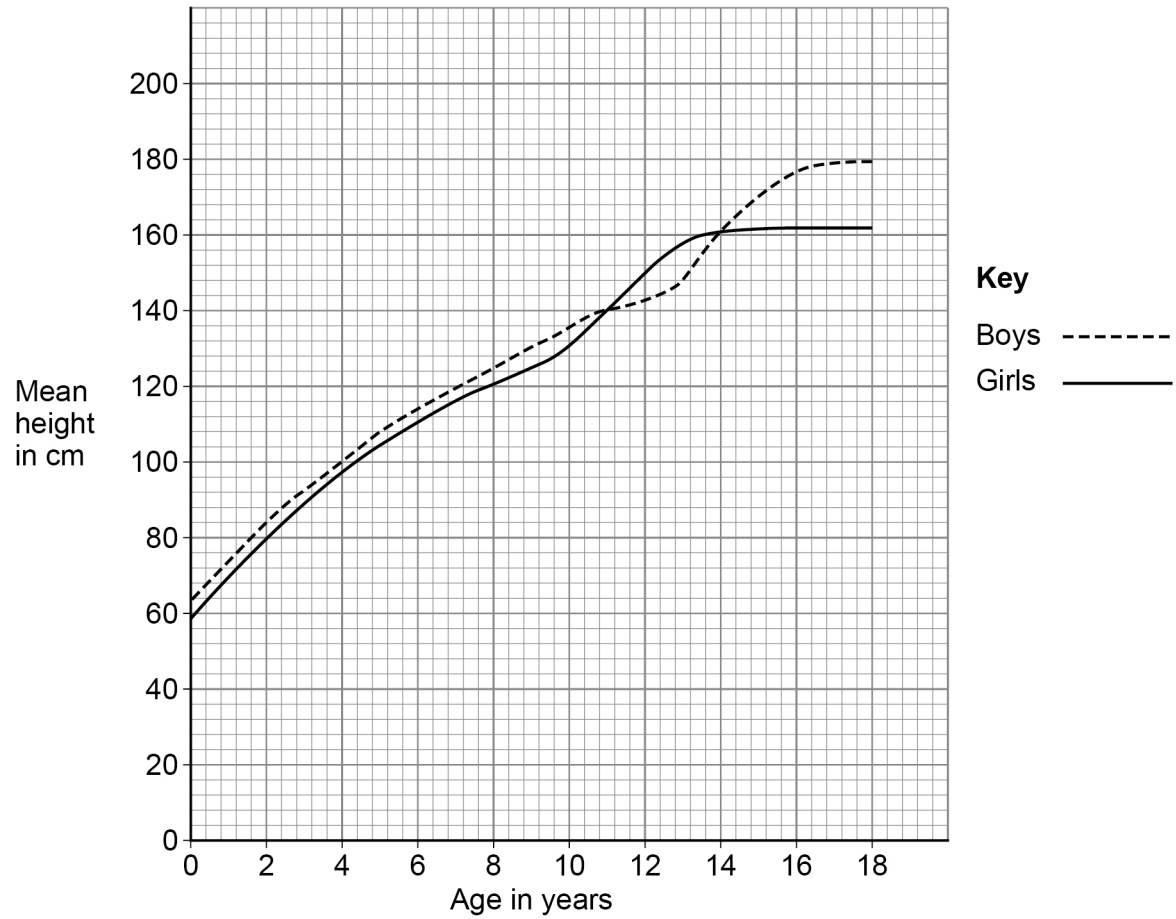
Turn over ►



Cell division is important in the growth of multicellular organisms.

0 2 . 6 **Figure 5** shows the mean height of boys and of girls from birth to age 18 years.

Figure 5



Key

Boys -----

Girls —————



Compare the growth of boys with the growth of girls.

Use data from **Figure 5** in your answer.

[6 marks]

0 2 . 7

Give **one** way that cell division by mitosis is important in **fully grown** animals.

[1 mark]

14

Turn over ►



0 3

Amylase is an enzyme that digests starch.

0 3 . 1

Which organs in the human digestive system produce amylase?

[1 mark]Tick (✓) **one** box.

Liver, small intestine and large intestine

Salivary glands, stomach and liver

Salivary glands, pancreas and small intestine

Stomach, pancreas and large intestine

A student investigated the effect of pH on the activity of amylase.

This is the method used.

1. Prepare amylase solution at pH 5
2. Mix the amylase solution with starch in a boiling tube.
3. Remove a drop of the amylase-starch mixture every 30 seconds and test it for the presence of starch.
4. Record the time when all the starch has been digested.
5. Repeat steps 1 to 4 using amylase solution prepared at pH 6, then at pH 7 and then at pH 8

0 3 . 2

What was the independent variable in this investigation?

[1 mark]

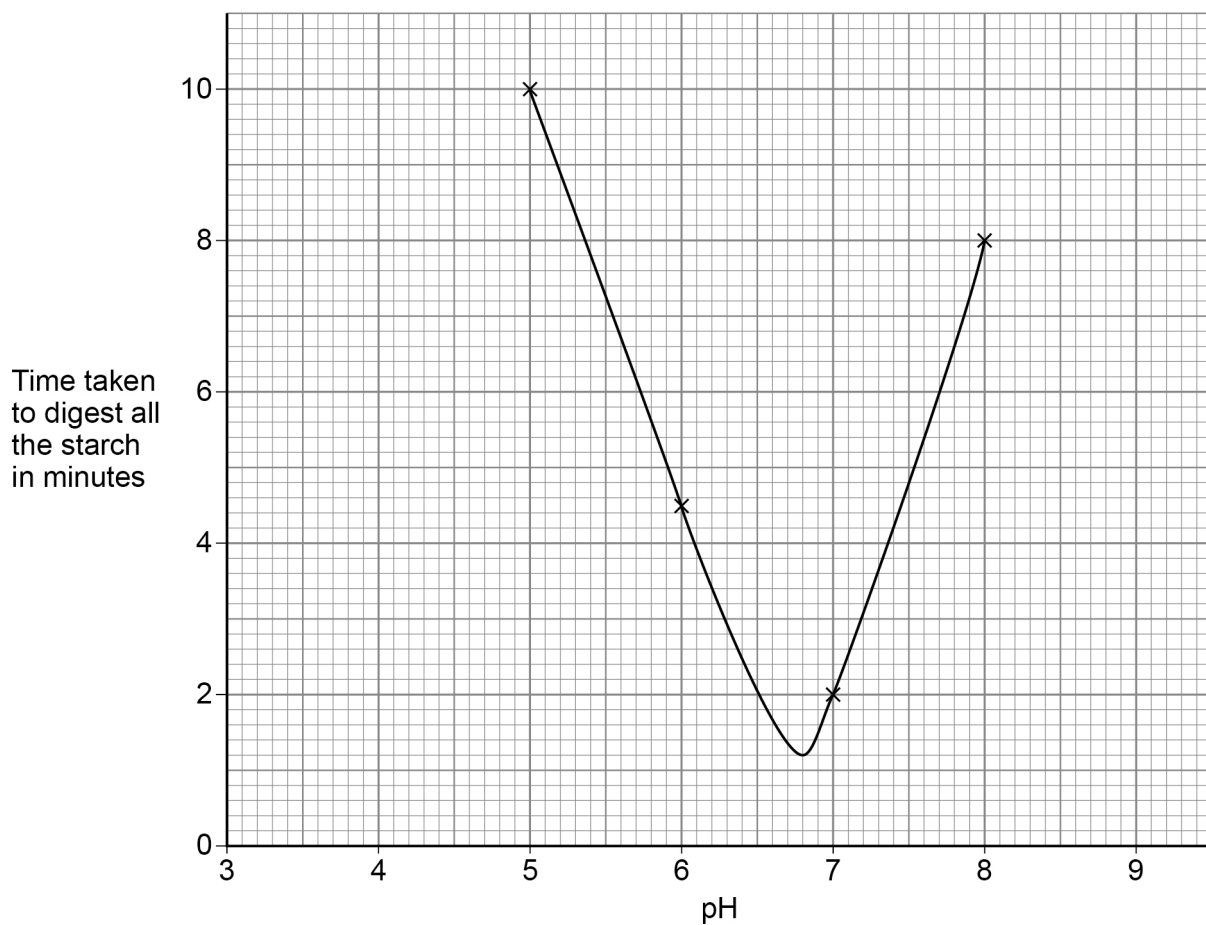


0 3 . 3 Describe how the student would know when all the starch had been digested.

[1 mark]

0 3 . 4 Figure 6 shows the student's results.

Figure 6



What was the optimum pH for the amylase?

Use **Figure 6**.

[1 mark]

Optimum pH = _____

Turn over ►



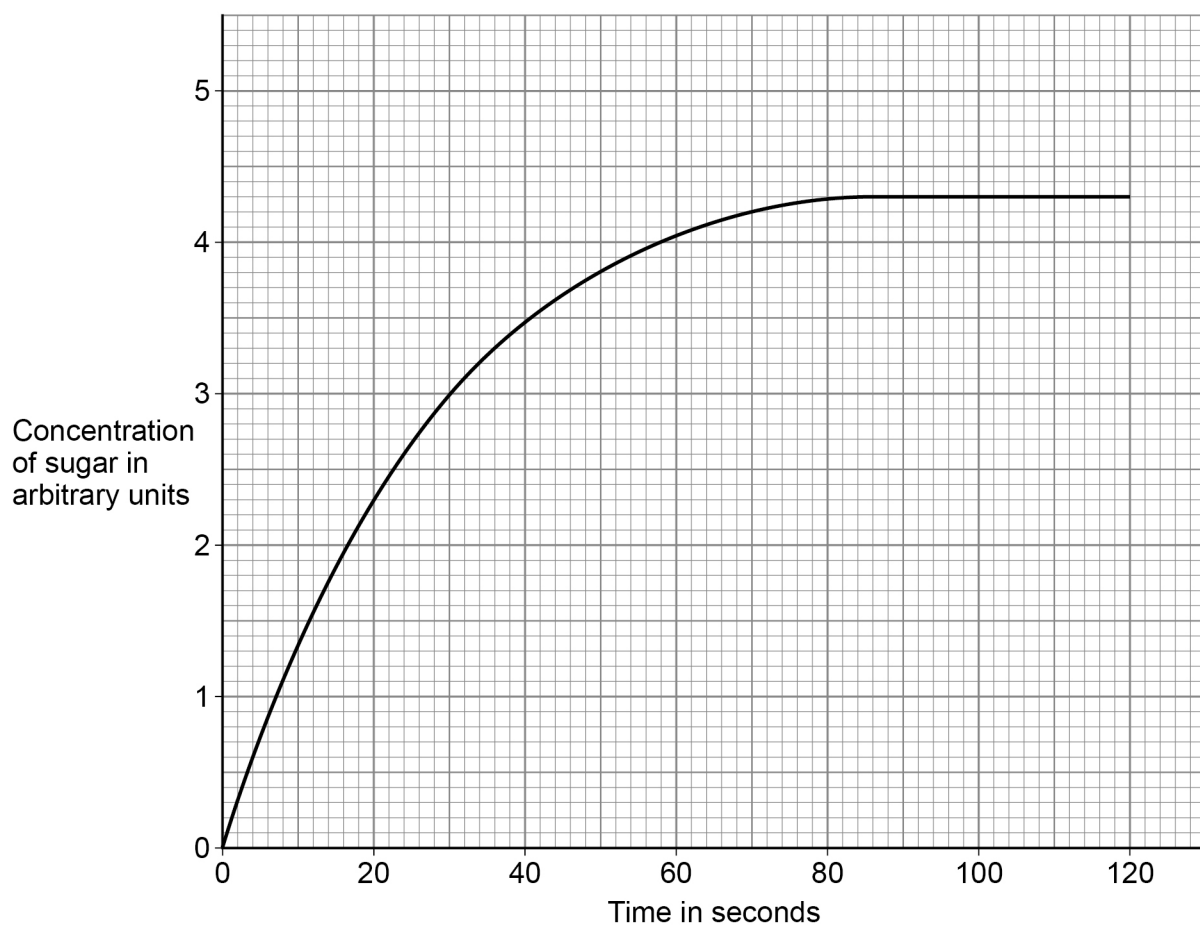
A scientist did a different investigation.

This is the method used.

1. Prepare amylase solution at the optimum pH.
2. Mix the amylase solution with starch in a boiling tube.
3. Measure the concentration of sugar every 10 seconds for 2 minutes.

Figure 7 shows the scientist's results.

Figure 7



0 3 . 5 How much time did it take for the amylase to digest all the starch?

Use **Figure 7**.

[1 mark]

Time to digest all the starch = _____ seconds



0 3 . 6

Determine the rate of sugar production per minute at 40 seconds.

[4 marks]

Rate = _____ arbitrary units per minute

0 3 . 7

Explain how the structure of enzyme molecules is related to the effect of pH on the activity of amylase.

[6 marks]

15

Turn over ►



0 4

Photosynthesis is an important chemical reaction in plants.

0 4 . 1

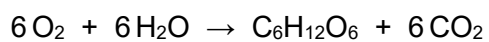


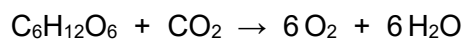
Why is light needed for photosynthesis?

[1 mark]

0 4 . 2

What is the equation for photosynthesis?

[1 mark]

Tick (✓) **one** box.

0 4 . 3

A student investigated the effect of different colours of light on the rate of photosynthesis at room temperature.

The student used pondweed in water.

A piece of pondweed was placed in red light, then in blue light and then in green light.

Each colour of light was the same intensity.

Describe how the student should make accurate measurements to obtain valid results for the rate of photosynthesis.

[4 marks]

Question 4 continues on the next page

Turn over ►



A scientist investigated the effect of different wavelengths of light on the rate of photosynthesis.

The wavelength of light determines the colour of the light.

Figure 8 shows the student's results.

Figure 9 shows the scientist's results.

Figure 8

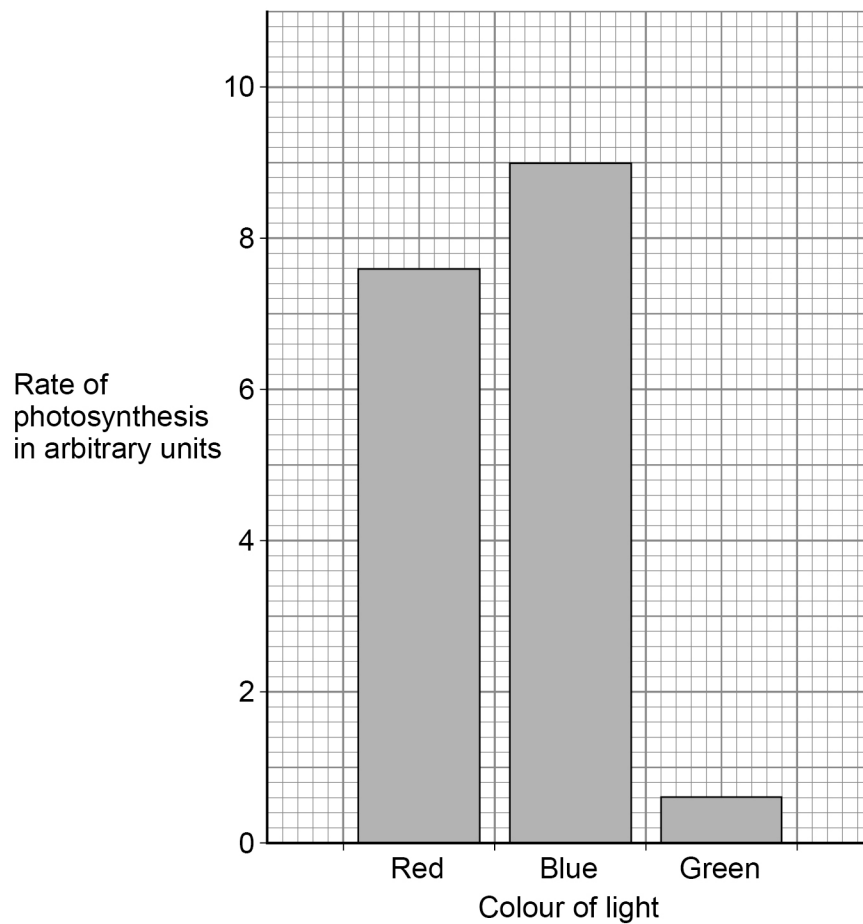
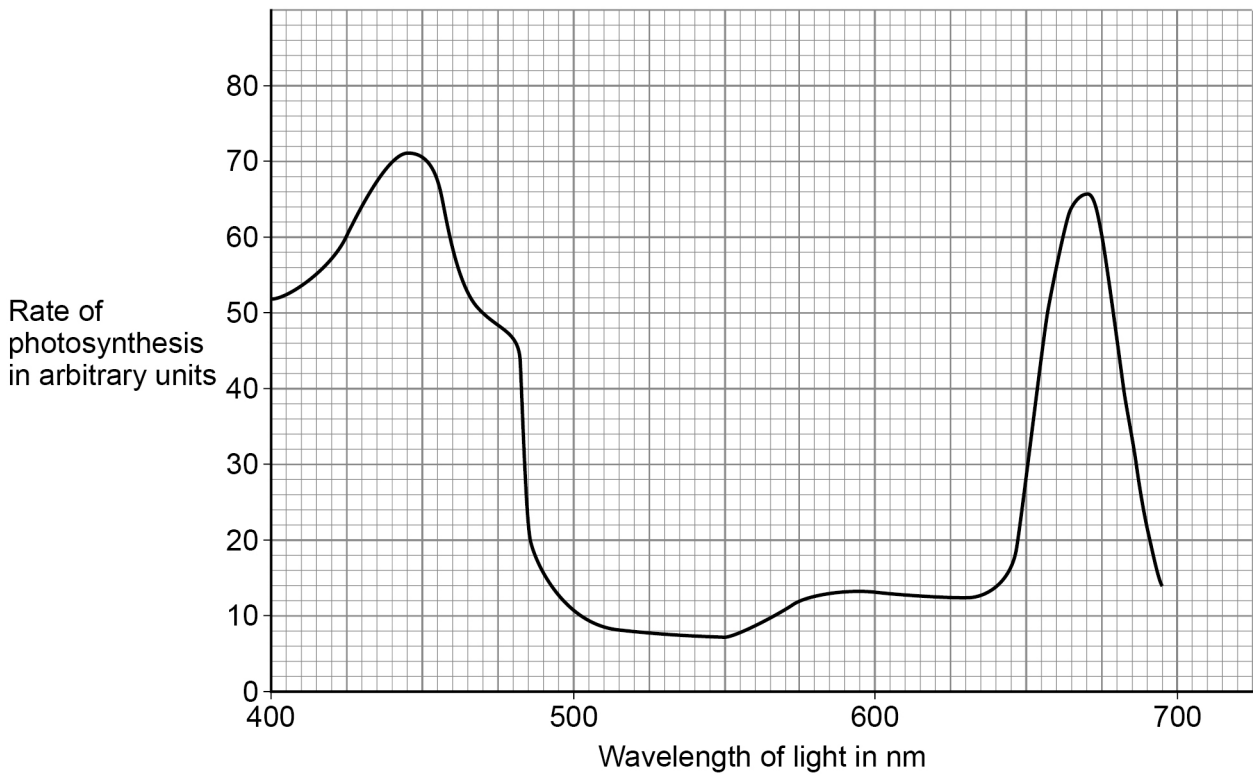


Figure 9



0 4 . 4

Why are the results for the two investigations presented differently?

[2 marks]

0 4 . 5

Suggest the range in wavelength of green light.

Use **Figure 8** and **Figure 9**.

[1 mark]

Range in wavelength of green light = from _____ nm to _____ nm

9

Turn over ►



There are no questions printed on this page

*Do not write
outside the
box*

**DO NOT WRITE ON THIS PAGE
ANSWER IN THE SPACES PROVIDED**



0 5

This question is about tumours.

0 5 . 1

Describe the similarities and differences between benign tumours and malignant tumours.

[4 marks]

Question 5 continues on the next page

Turn over ►

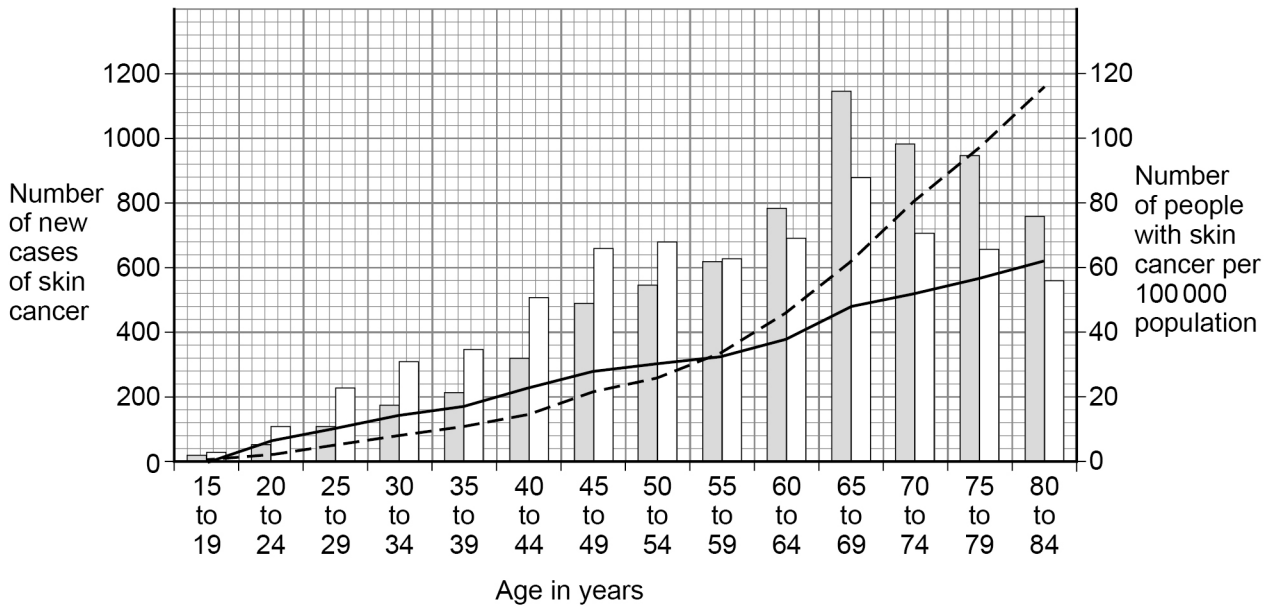


Figure 10 shows data about skin cancer in males and females for different age groups in the UK.

It shows:

- the number of new cases of skin cancer in 1 year
- the number of people with skin cancer per 100 000 population in 1 year.

Figure 10



Key

- New male cases
- New female cases
- Number of males with skin cancer per 100 000
- Number of females with skin cancer per 100 000



0 5 . 2

There are no new cases of skin cancer diagnosed in people younger than 15 years of age.

Explain why.

[2 marks]

0 5 . 3

Give **two** conclusions about the number of **new cases** of skin cancer.

Use **Figure 10**.

[2 marks]

1 _____

2 _____

0 5 . 4

The data for the number of people with skin cancer is given per 100 000 population.

Suggest why the data is **not** given as the total number of people.

[1 mark]

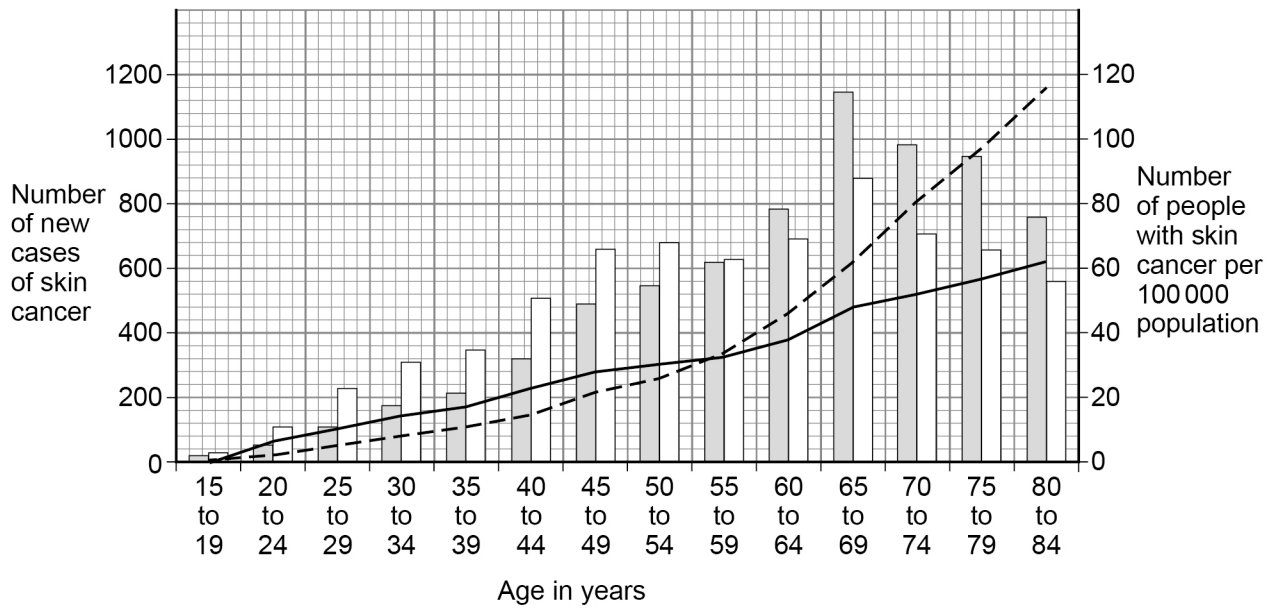
Question 5 continues on the next page

Turn over ►



Figure 10 is repeated below.

Figure 10



Key
 ■ New male cases
 □ New female cases
 - - - Number of males with skin cancer per 100 000
 — Number of females with skin cancer per 100 000

0 5 . 5 Describe **two** trends shown in **Figure 10**.

Use **only** the data for the number of people with skin cancer per 100 000 population.

[2 marks]

1 _____

2 _____



0	5	.	6
---	---	---	---

The estimated population of males aged 80 to 84 years was 694 000

Calculate the number of males aged 80 to 84 years with skin cancer in that year.

Use **Figure 10**.

Give your answer to 3 significant figures.

[3 marks]

Number of males with skin cancer (3 significant figures) = _____

14

Turn over for the next question

Turn over ►



0 6

This question is about the heart.

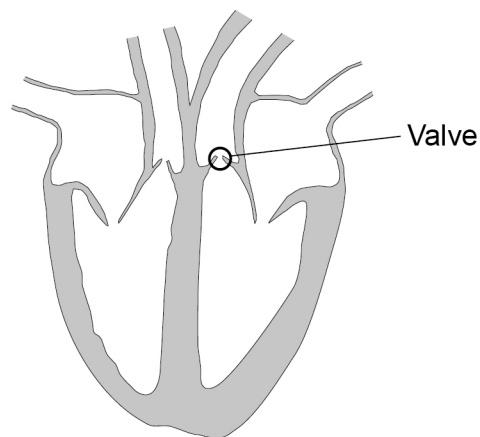
0 6 . 1

Why is the heart described as an organ?

[1 mark]

0 6 . 2

Valves in the heart keep the blood flowing through the heart in one direction.

Figure 11 shows the heart with one of the valves labelled.**Figure 11**Explain the effects on a person if the valve labelled in **Figure 11** developed a leak.**[4 marks]**



06.3

Faulty heart valves can be replaced using biological or mechanical valves.

The faulty valve is replaced during an operation.

Biological valves:

- are from animals or human donors
- allow blood to flow through them normally
- wear out and stiffen over time, so may need to be replaced.

Mechanical valves:

- are made from synthetic materials
- may cause blood clots on the surface of the valve
- require anti-clotting drugs to be taken for the rest of the patient's life
- can last for a very long time in ideal conditions.

A young woman enjoys extreme sports and would like to start a family.

The woman needs a heart valve replacing.

Describe the advantages and disadvantages for this young woman of having a biological heart valve instead of a mechanical heart valve.

[4 marks]

9

END OF QUESTIONS



There are no questions printed on this page

*Do not write
outside the
box*

**DO NOT WRITE ON THIS PAGE
ANSWER IN THE SPACES PROVIDED**



There are no questions printed on this page

*Do not write
outside the
box*

**DO NOT WRITE ON THIS PAGE
ANSWER IN THE SPACES PROVIDED**

Copyright information

For confidentiality purposes, all acknowledgements of third-party copyright material are published in a separate booklet. This booklet is published after each live examination series and is available for free download from www.aqa.org.uk.

Permission to reproduce all copyright material has been applied for. In some cases, efforts to contact copyright-holders may have been unsuccessful and AQA will be happy to rectify any omissions of acknowledgements. If you have any queries please contact the Copyright Team.

Copyright © 2022 AQA and its licensors. All rights reserved.



3 2



2 2 6 G 8 4 6 4 / B / 1 H

IB/M/Jun22/8464/B/1H